

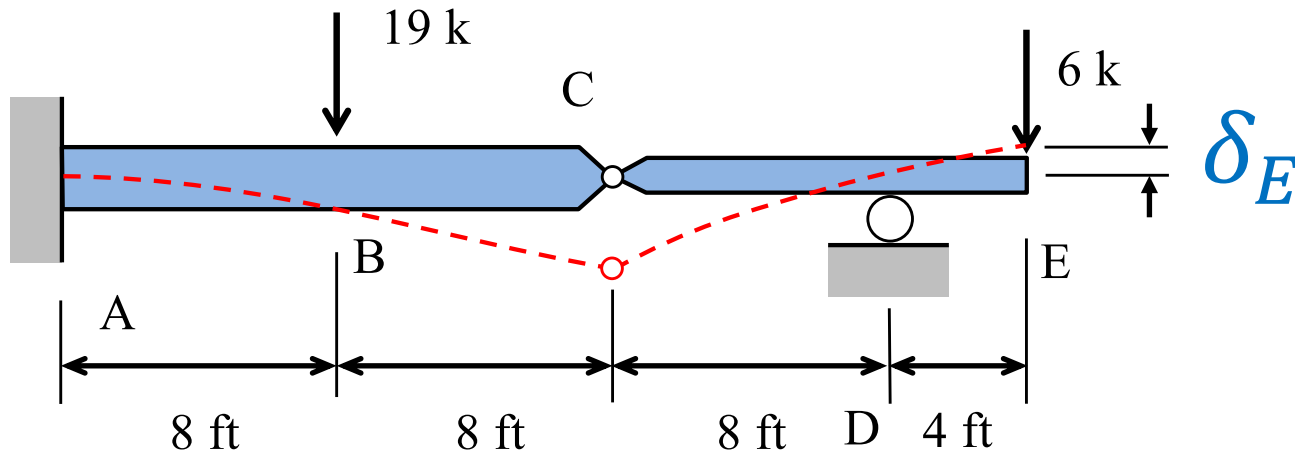
Method of Virtual Work

Beam Deflection Example

Steven Vukazich

San Jose State University

Beam Deflection Example

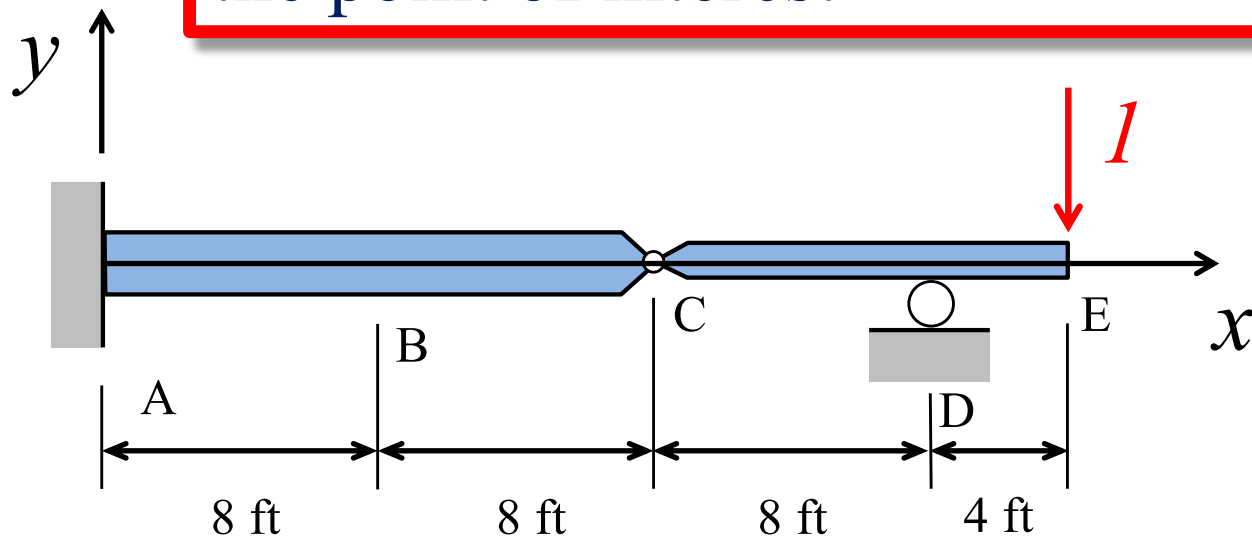


The overhanging beam shown has a fixed support at A, a roller support at C and an internal hinge at B. $EI_{ABC} = 2,000,000 \text{ k-in}^2$ and $EI_{CDE} = 800,000 \text{ k-in}^2$

For the loads shown, find the vertical deflection at point E.

Find the Deflection at Point E

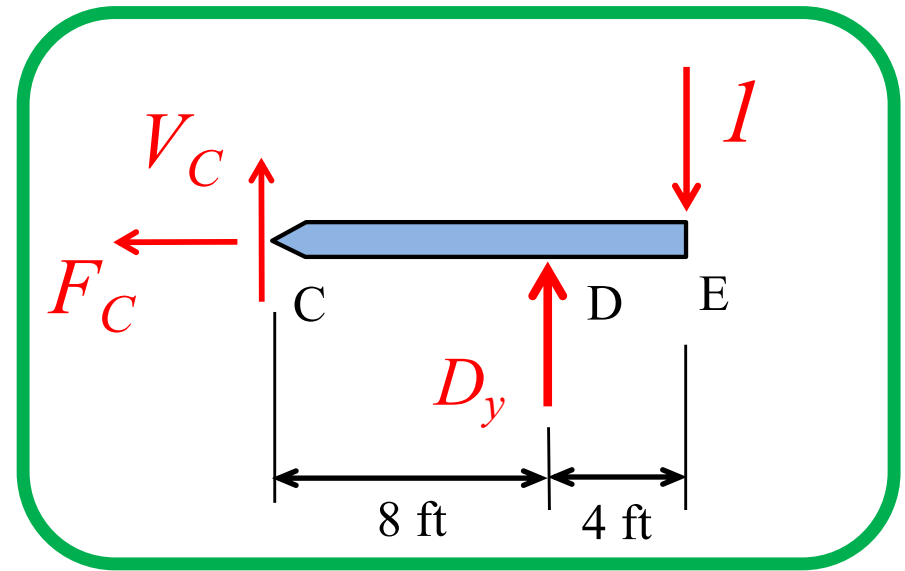
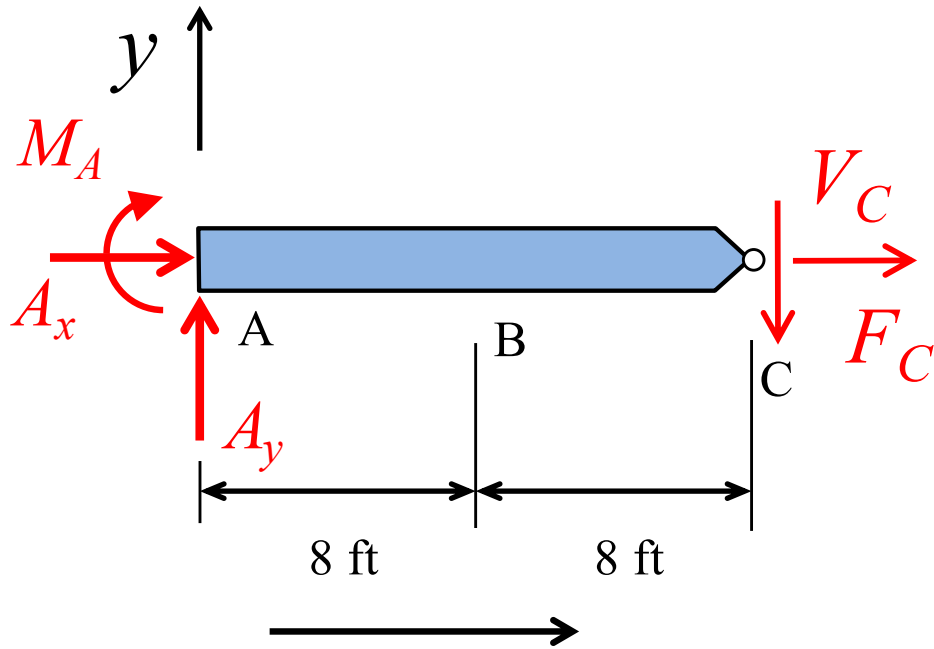
Step 1 – Remove all loads and apply a virtual force (or moment) to measure the deformation at the point of interest



From an equilibrium analysis, find the internal bending moment function for the virtual system:

$$M_Q(x)$$

Find the Moment Functions for the Virtual System



$$\sum M_A = 0 \rightarrow M_A = 8 \text{ ft}$$

$$\sum F_x = 0 \rightarrow A_x = 0$$

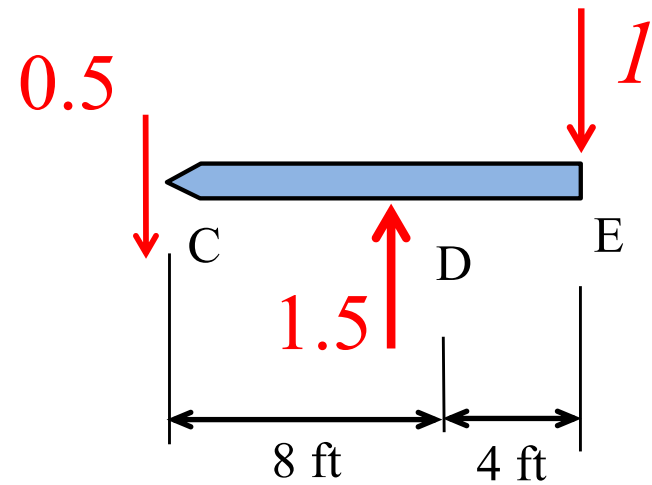
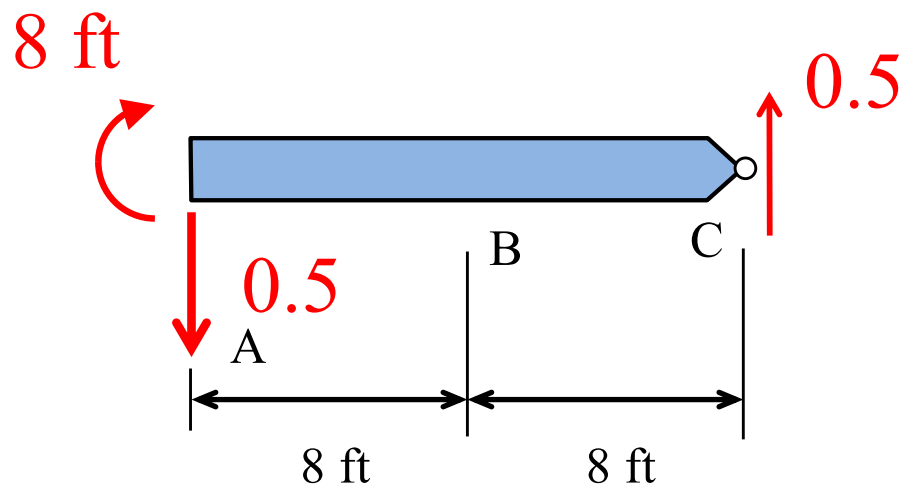
$$\sum F_y = 0 \rightarrow A_y = -0.5$$

$$\sum M_C = 0 \rightarrow D_y = 1.5$$

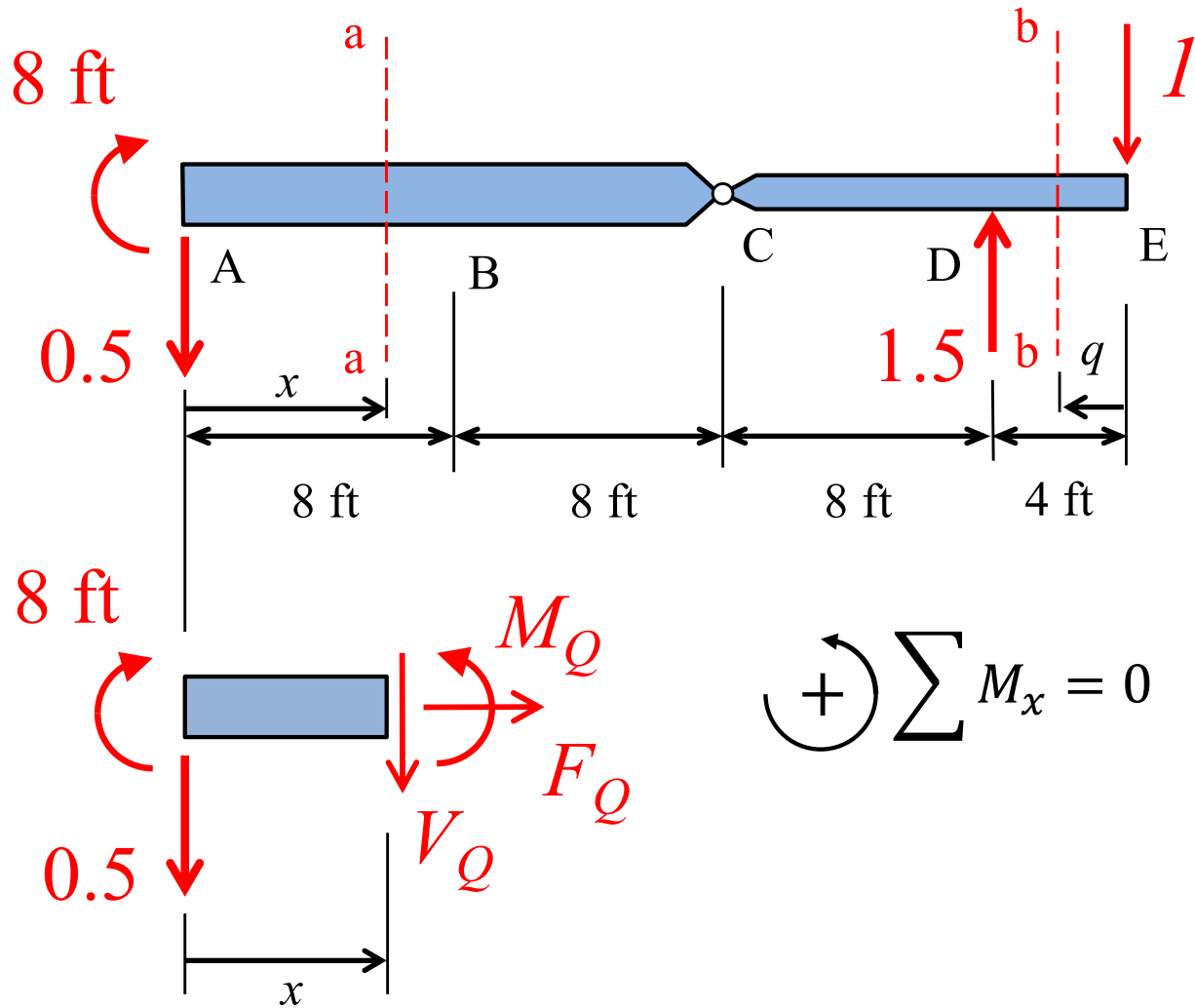
$$\sum F_x = 0 \rightarrow F_C = 0$$

$$\sum F_y = 0 \rightarrow V_C = -0.5$$

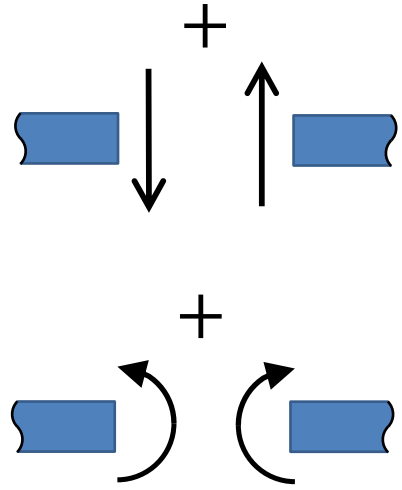
Support Reactions for the Virtual System



Moment Functions for the Virtual System

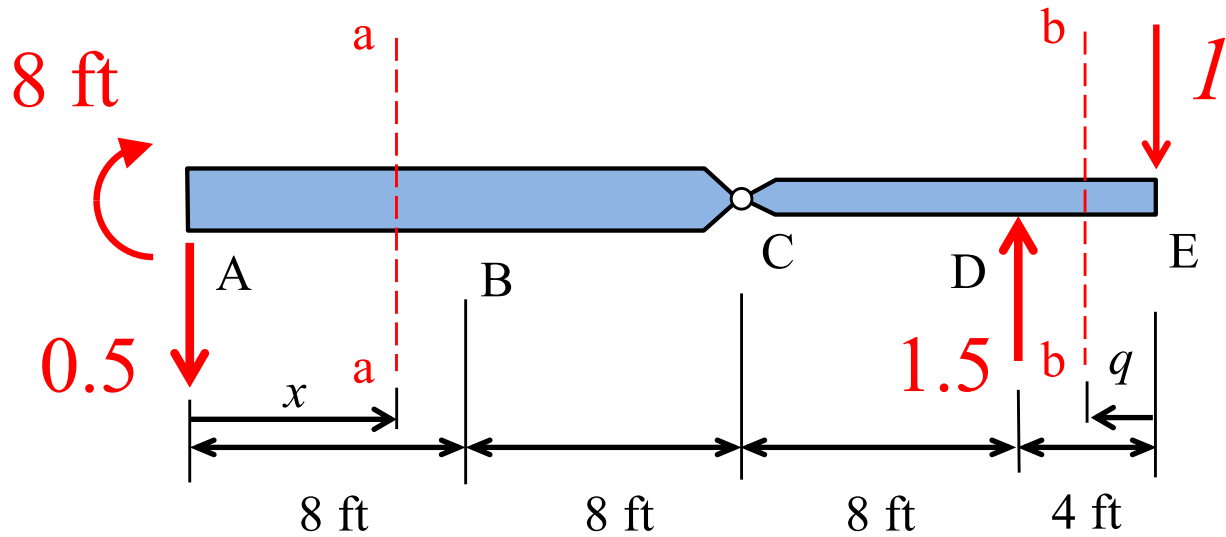


$$(+)\sum M_x = 0$$

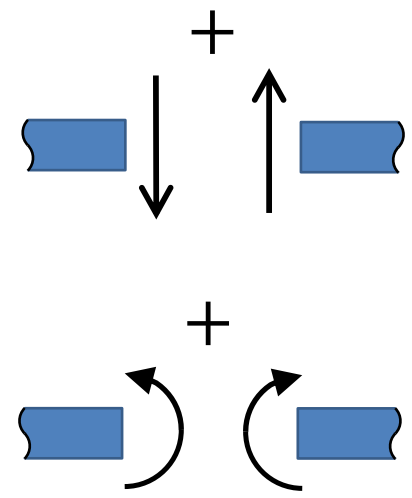
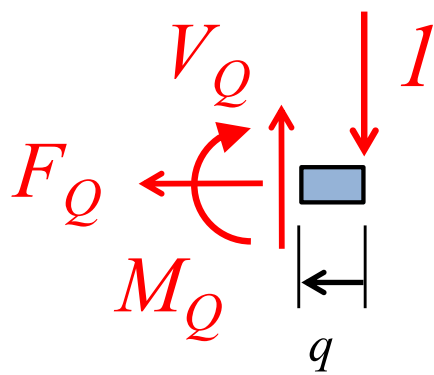


$$M_Q = 8 - 0.5x \quad 0 < x < 24$$

Moment Functions for the Virtual System

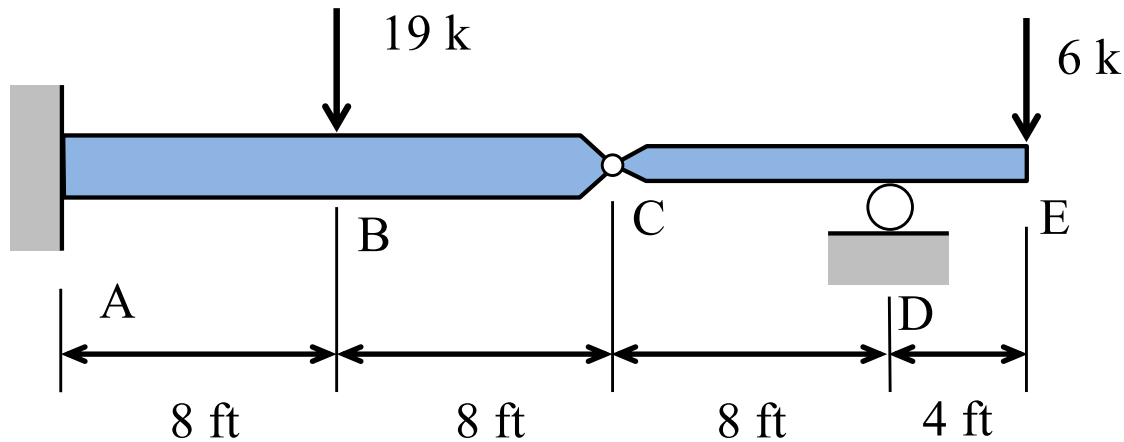


$$\sum M_Q = 0$$



$$M_Q = -q \quad 0 < q < 4$$

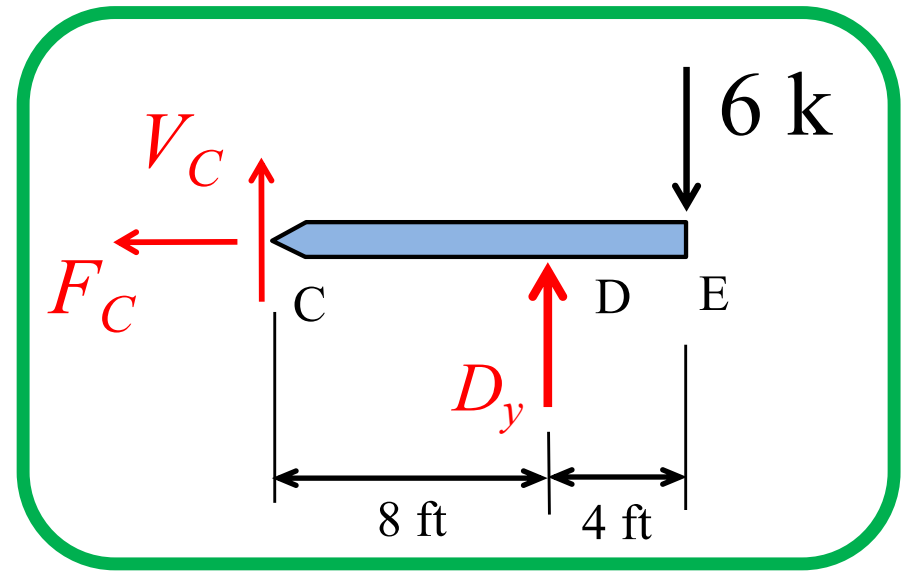
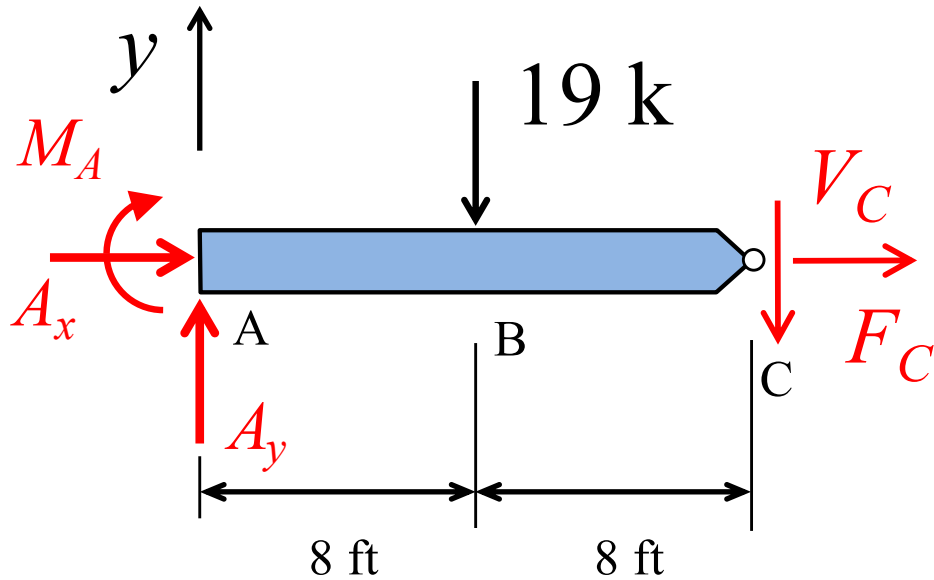
Step 2 – Replace all of the loads on the structure and perform the real analysis



From an equilibrium analysis, find the internal bending moment function for the real system:

$$M_P(x)$$

Find the Moment Diagram for the Real System



$$\curvearrowright \sum M_A = 0 \rightarrow M_A = -104 \text{ k-ft}$$

$$\curvearrowright \sum M_C = 0 \rightarrow D_y = 9 \text{ k}$$

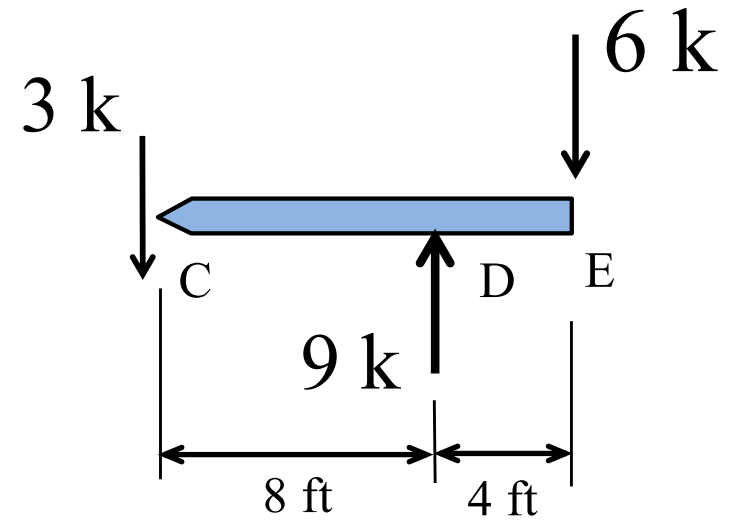
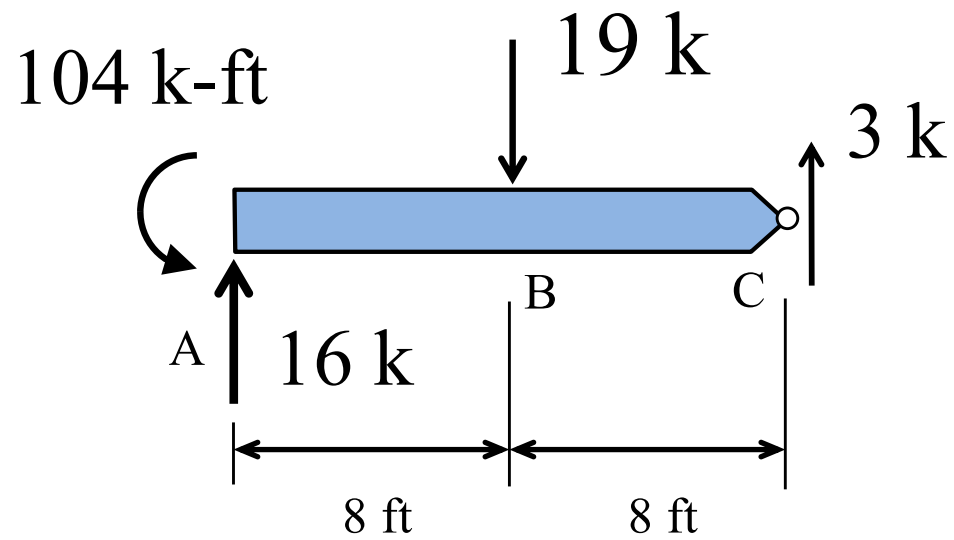
$$\rightarrow \sum F_x = 0 \rightarrow A_x = 0$$

$$\rightarrow \sum F_x = 0 \rightarrow F_C = 0$$

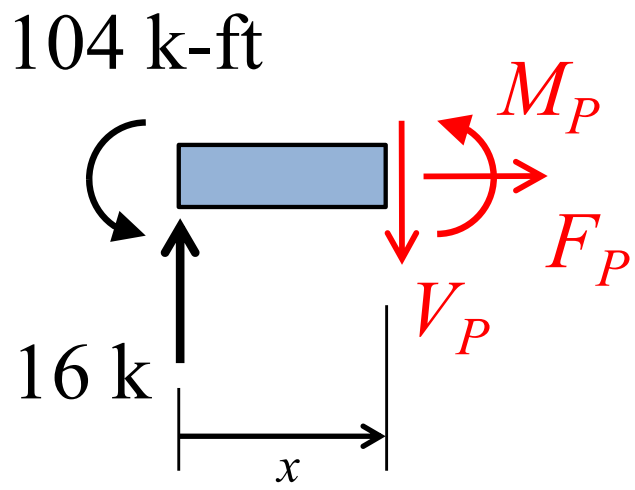
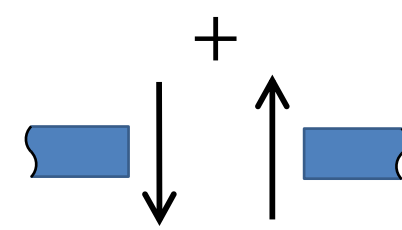
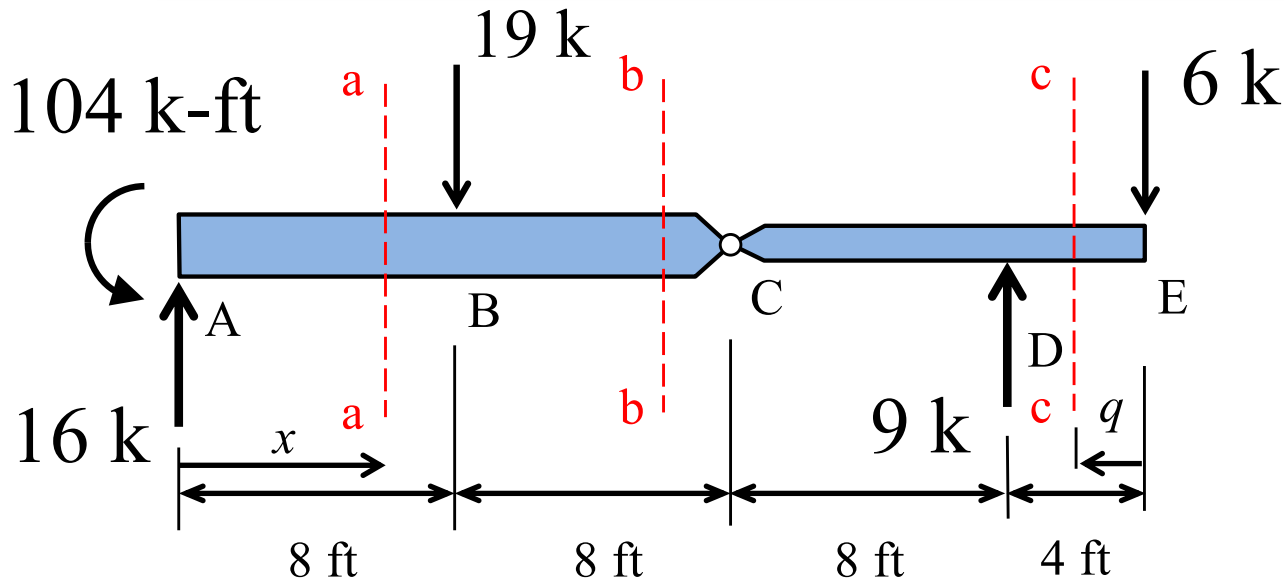
$$\uparrow \sum F_y = 0 \rightarrow A_y = 16 \text{ k}$$

$$\uparrow \sum F_y = 0 \rightarrow V_C = -3 \text{ k}$$

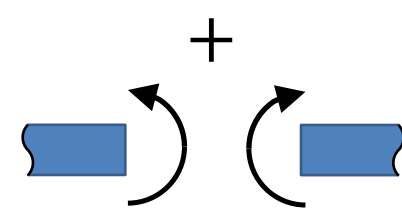
Support Reactions for the Real System



Moment Functions for the Real System

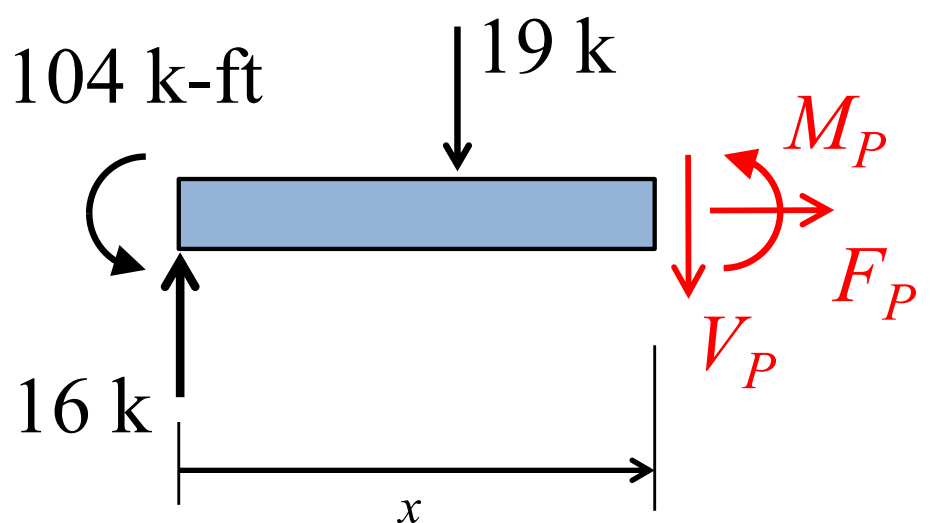
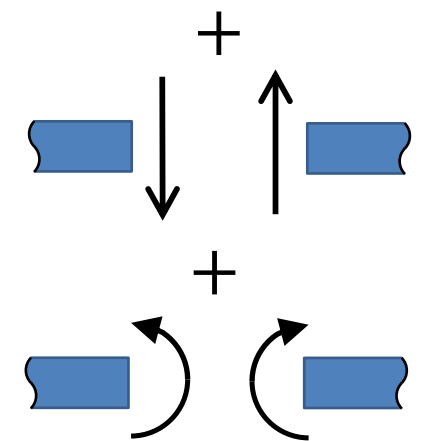
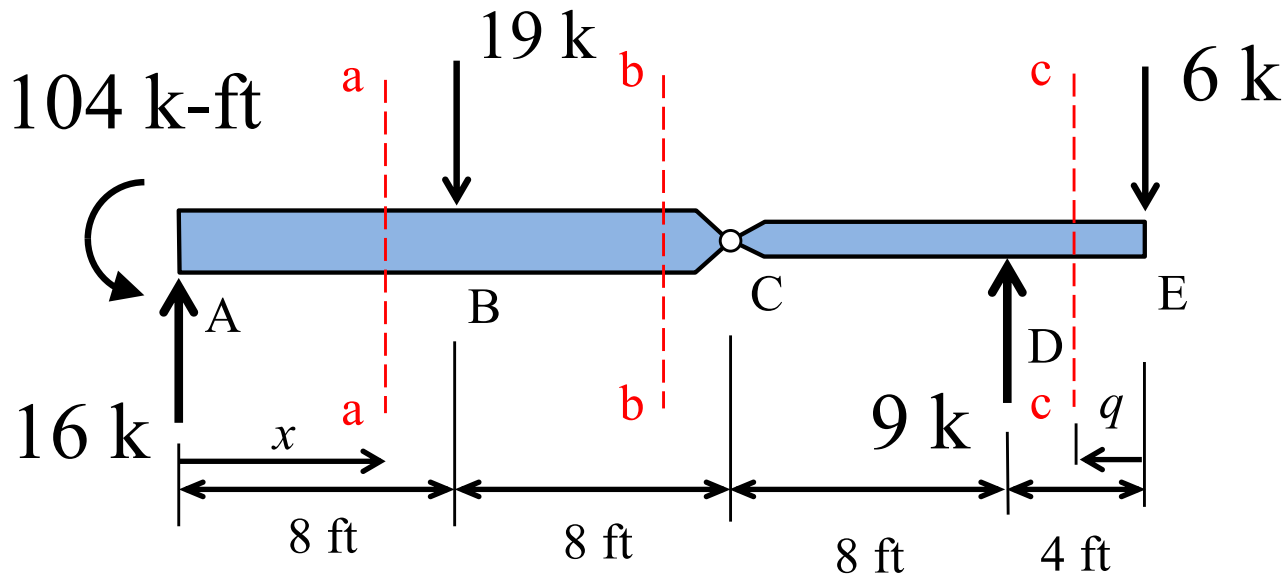


$$\oplus \sum M_x = 0$$



$$M_P = -104 + 16x \quad 0 < x < 8$$

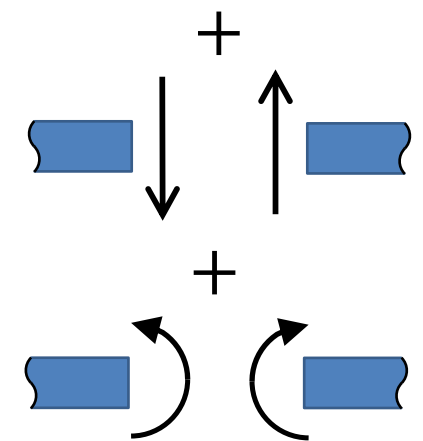
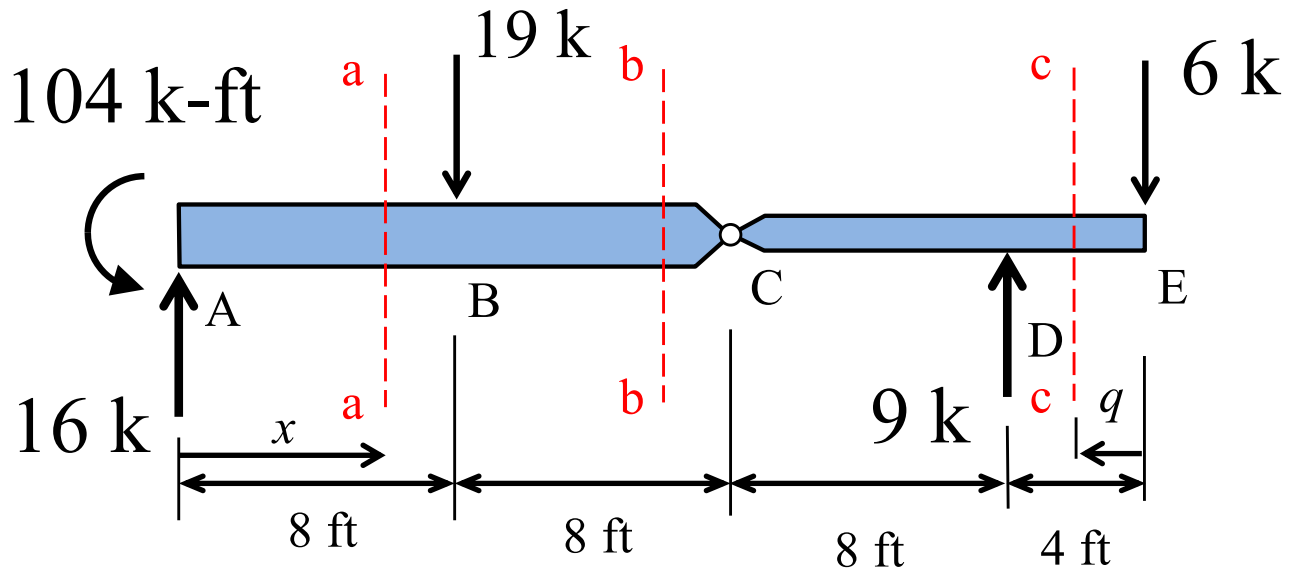
Moment Functions for the Real System



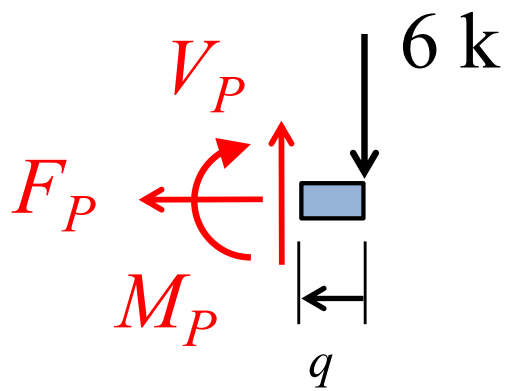
$$\sum M_x = 0$$

$$M_P = 48 - 3x \quad 8 < x < 24$$

Moment Functions for the Real System



$$\sum M_q = 0$$



$$M_P = -6q \quad 0 < q < 4$$

Evaluate Product Integrals for ABC

$$\int_0^{L_{ABC}} M_Q M_P dx = \int_0^8 (8 - 0.5x)(-104 + 16x) dx + \int_8^{16} (8 - 0.5x)(48 - 3x) dx$$

$$\int_0^{L_{ABC}} M_Q M_P dx = \int_0^8 (-832 + 180x - 8x^2) dx + \int_8^{16} (384 - 48x + 1.5x^2) dx$$

$$\int_0^{L_{ABC}} M_Q M_P dx = \left[-832x + 180 \frac{x^2}{2} - 8 \frac{x^3}{3} \right]_0^8 + \left[384x - 48 \frac{x^2}{2} + 1.5 \frac{x^3}{3} \right]_8^{16}$$

$$\int_0^{L_{ABC}} M_Q M_P dx = \left[-832(8) + 180 \frac{(8)^2}{2} - 8 \frac{(8)^3}{3} \right] + \left[384(16) - 48 \frac{(16)^2}{2} + 1.5 \frac{(16)^3}{3} \right] - \left[384(8) - 48 \frac{(8)^2}{2} + 1.5 \frac{(8)^3}{3} \right]$$

$$\int_0^{L_{ABC}} M_Q M_P dx = [-2261.333] + [2048] - [1792] = -2005.333 \text{ k-ft}^3$$

Evaluate Product Integrals for CDE

$$\int_0^{LCDE} M_Q M_P dx = \int_{16}^{24} (8 - 0.5x)(48 - 3x) dx + \int_0^4 (-q)(-6q) dq$$

$$\int_0^{LCDE} M_Q M_P dx = \int_{16}^{24} (384 - 48x + 1.5x^2) dx + \int_0^4 (6q^2) dq$$

$$\int_0^{LCDE} M_Q M_P dx = \left[384x - 48 \frac{x^2}{2} + 1.5 \frac{x^3}{3} \right]_{16}^{24} + \left[6 \frac{q^3}{3} \right]_0^4$$

$$\int_0^{LCDE} M_Q M_P dx = \left[384(24) - 48 \frac{(24)^2}{2} + 1.5 \frac{(24)^3}{3} \right] - \left[384(16) - 48 \frac{16^2}{2} + 1.5 \frac{(16)^3}{3} \right] + \left[6 \frac{(4)^3}{3} \right]$$

$$\int_0^{LCDE} M_Q M_P dx = [2304] - [2048] + [128] = 384 \text{ k-ft}^3$$

Calculate Total Internal Work

$$1 \cdot \delta_E = \frac{1}{EI_{ABC}} \int_0^{L_{ABC}} M_Q M_P dx + \frac{1}{EI_{CDE}} \int_0^{L_{CDE}} M_Q M_P dx$$

$$\int_0^{L_{ABC}} M_Q M_P dx = (-2005.333 \text{ k-ft}^3) \left(\frac{12^3 \text{ in}^3}{\text{ft}^3} \right) = -3,465,216.0 \text{ k-in}^3$$

$$\int_0^{L_{CDE}} M_Q M_P dx = (384 \text{ k-ft}^3) \left(\frac{12^3 \text{ in}^3}{\text{ft}^3} \right) = 663,552 \text{ k-in}^3$$

$$\delta_E = \frac{-3,465,216.0 \text{ k-in}^3}{2,000,000 \text{ k-in}^2} + \frac{663,552 \text{ k-in}^3}{800,000 \text{ k-in}^2}$$

$$\delta_E = -1.733 \text{ in} + 0.8294 \text{ in} = -0.903 \text{ in}$$

$$\delta_E = 0.903 \text{ in upward}$$

Negative result, so deflection is in the opposite direction of the virtual unit load

Beam Deflection Example Result

